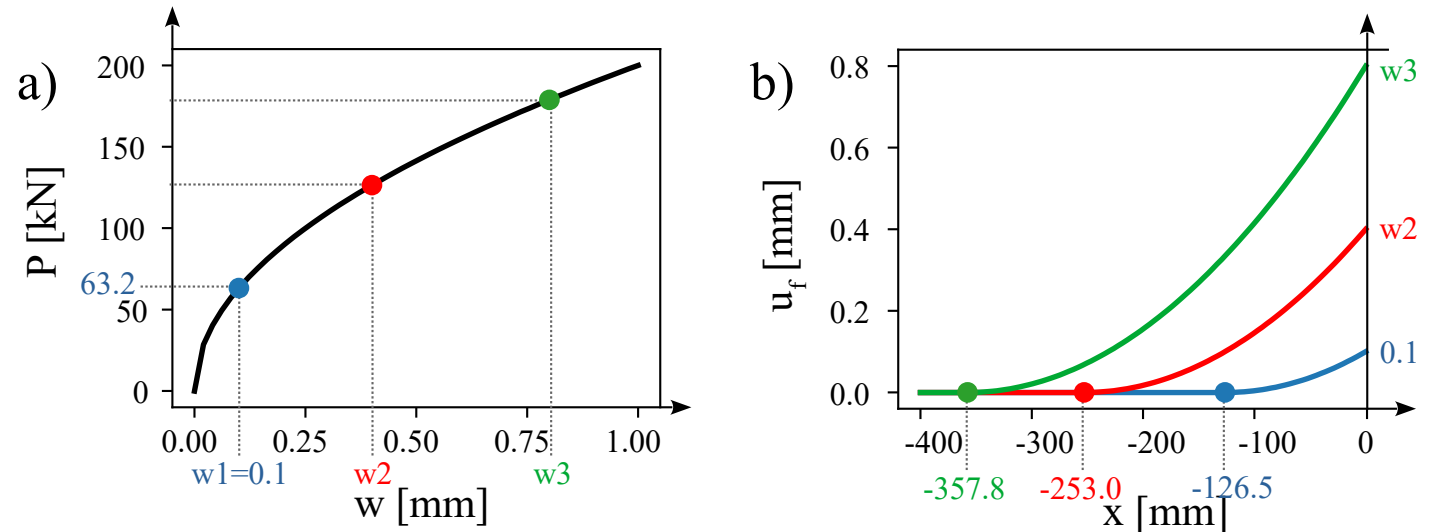
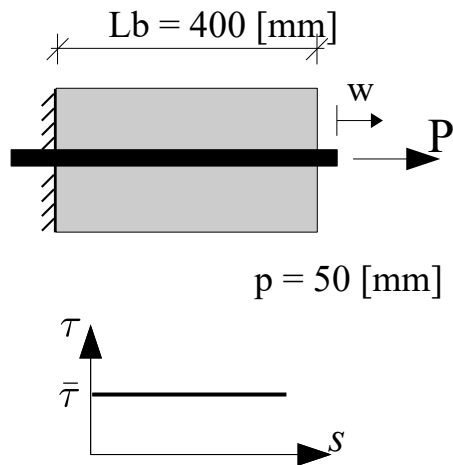


X0201: Pull-out with constant bond-slip law

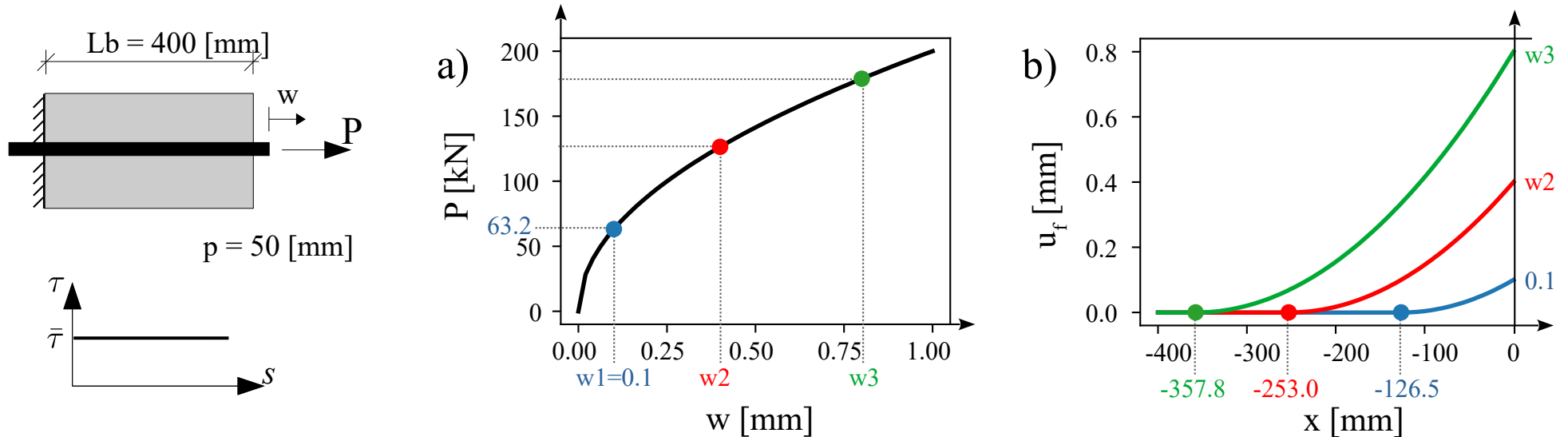
For the displayed pull-out test, the pull-out curve and the displacement profiles of the rebar at three loading stages are given. The pull-out response is governed by a constant bond-slip law, and a rigid matrix is assumed.



The steel rebar area and stiffness are given as: $A_f = 200$ [mm²], $E_f = 200000$ [MPa].

- Determine the bond stress ($\bar{\tau}$) governing the constant bond-slip law.
- Plot the shear flow profiles at the loading stages w_1 , w_2 and w_3 .
- Calculate the pull-out force at the loading stages w_2 and w_3 .
- Calculate the displacements w_2 and w_3 .
- Plot strain profiles of the steel rebar at the loading stages w_1 , w_2 and w_3 .
- Plot the stress profiles of the steel rebar at the loading stages w_1 , w_2 and w_3 .

X0201: Pull-out with constant bond-slip law



a) Determine the bond stress ($\bar{\tau}$) governing the constant bond-slip law

Solution:

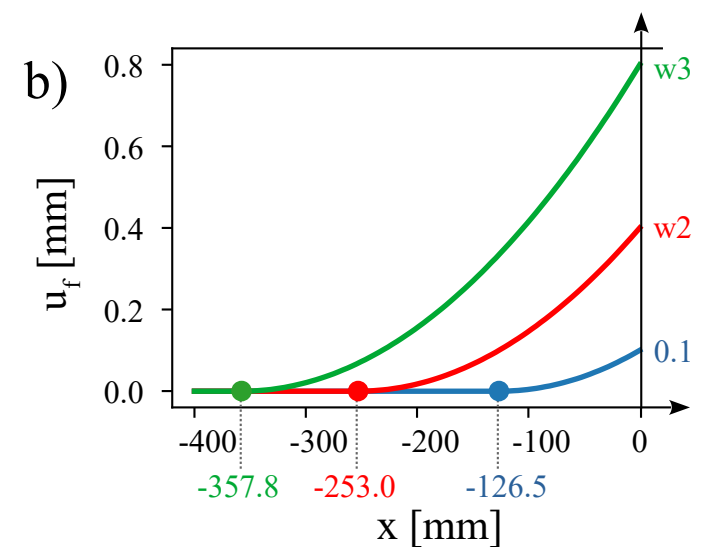
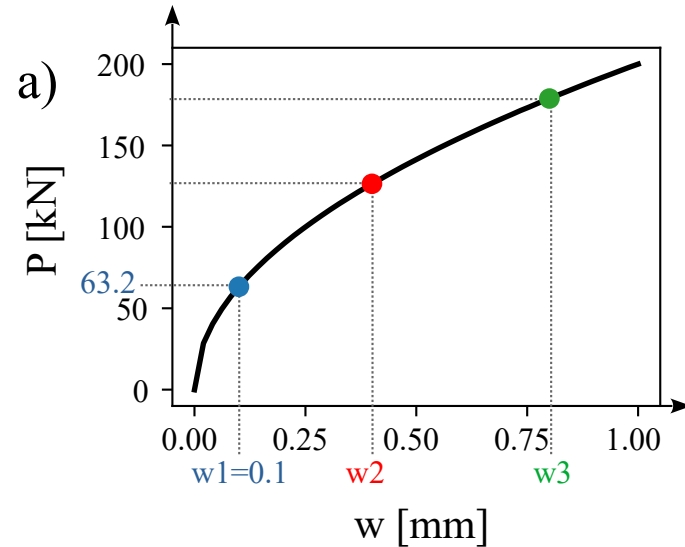
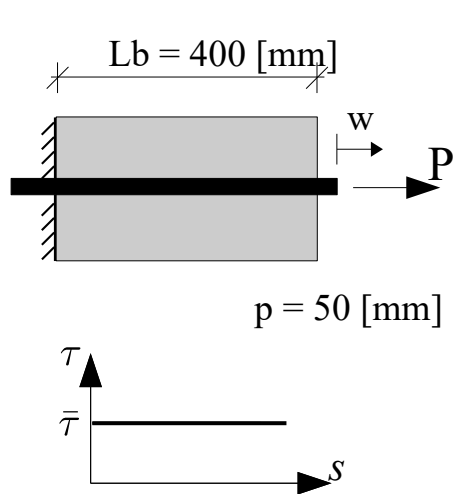
$$P(w) = \sqrt{2 p \bar{\tau} E_f A_f w}$$

$$\bar{\tau} = \frac{[P(w)]^2}{2 p E_f A_f w}$$

at w_1 :

$$\bar{\tau} = \frac{[63.2 \times 1000]^2}{2 \times 50 \times 200000 \times 200 \times 0.1} = 10 \text{ [MPa]}$$

X0201: Pull-out with constant bond-slip law

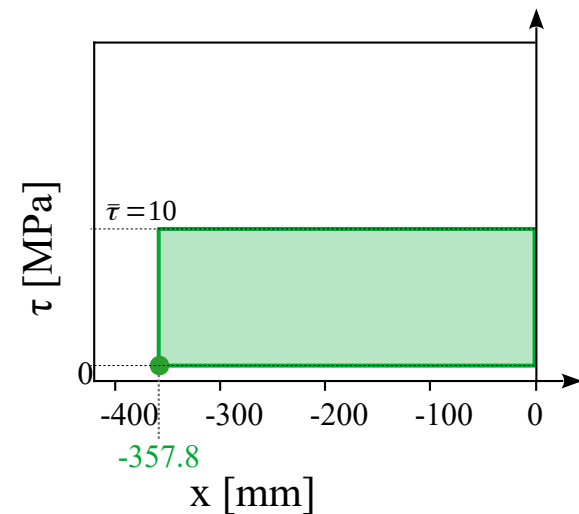
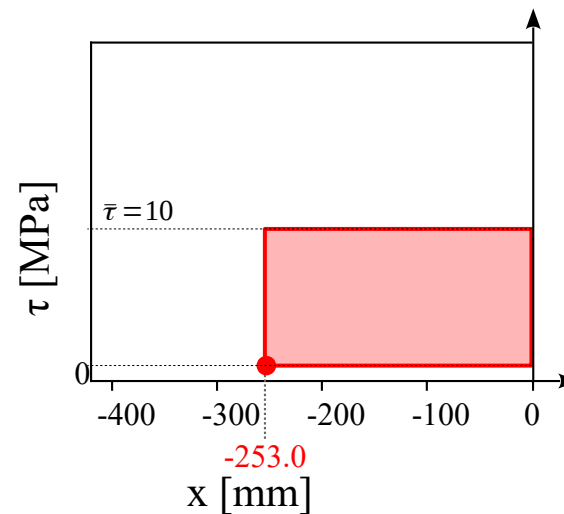
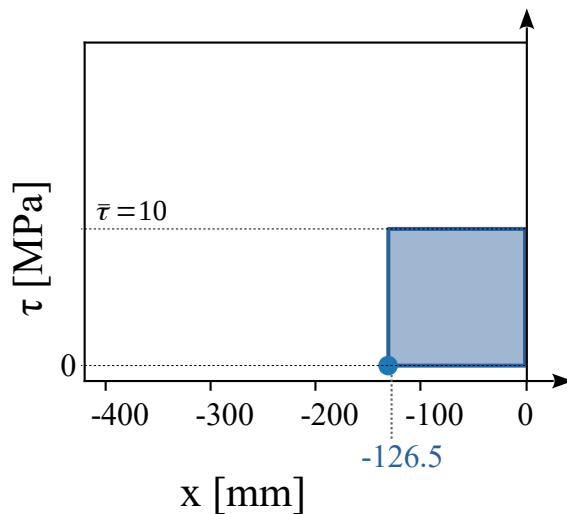


b) Plot the shear flow profiles at the loading stages $w1$, $w2$ and $w3$.

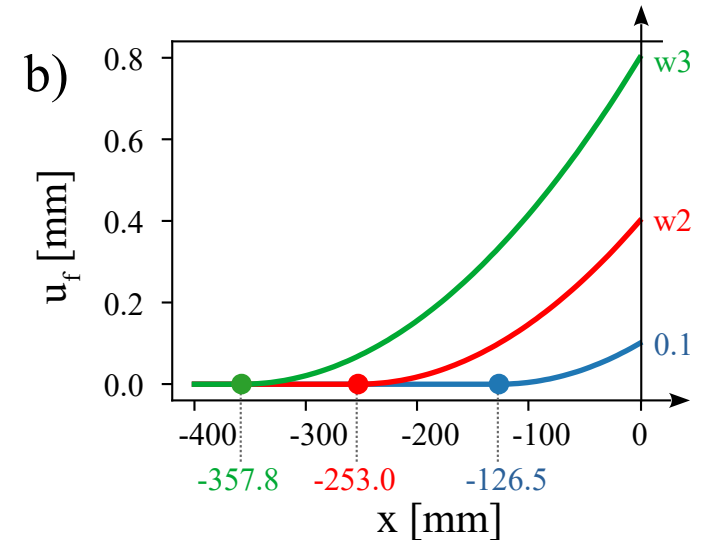
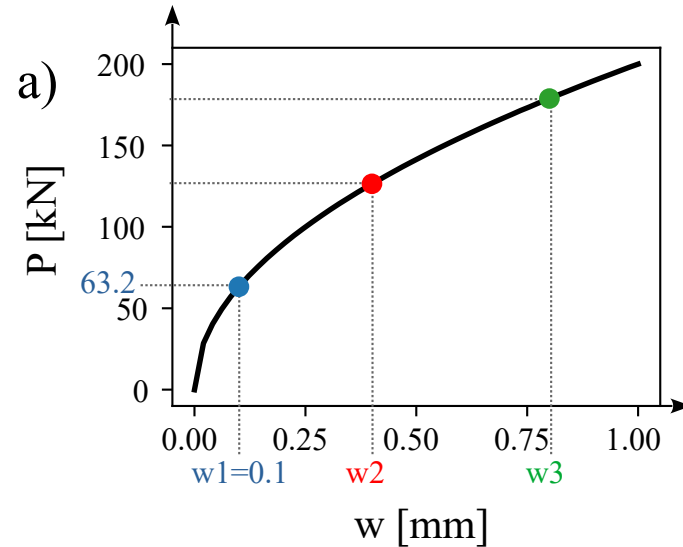
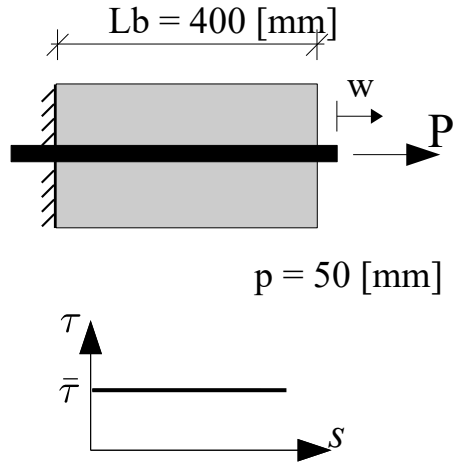
Solution:

Rigid matrix:

$$u_f = s$$



X0201: Pull-out with constant bond-slip law



c) Calculate the pull-out force at the loading stages w_2 and w_3 .

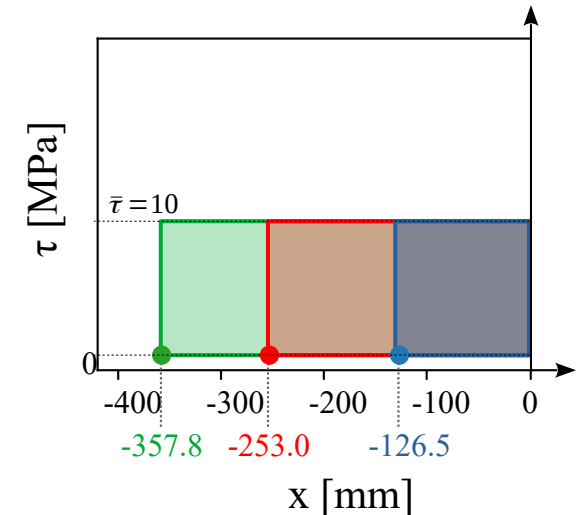
Solution:

$$P = \int_0^L p \tau(x) dx$$

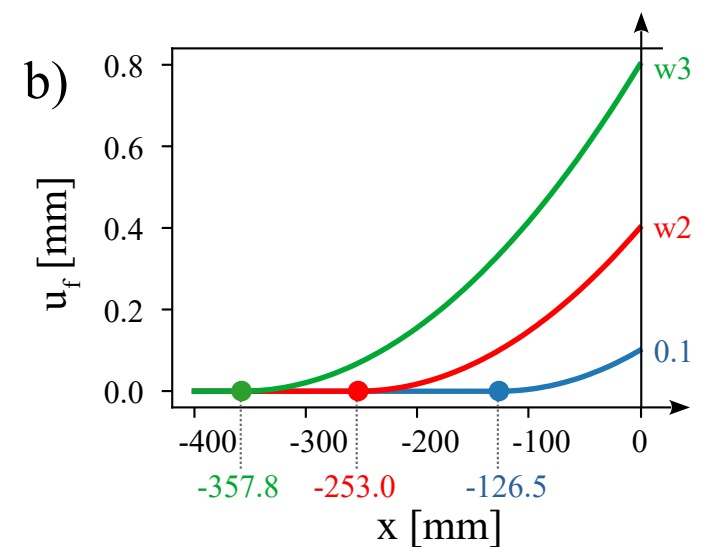
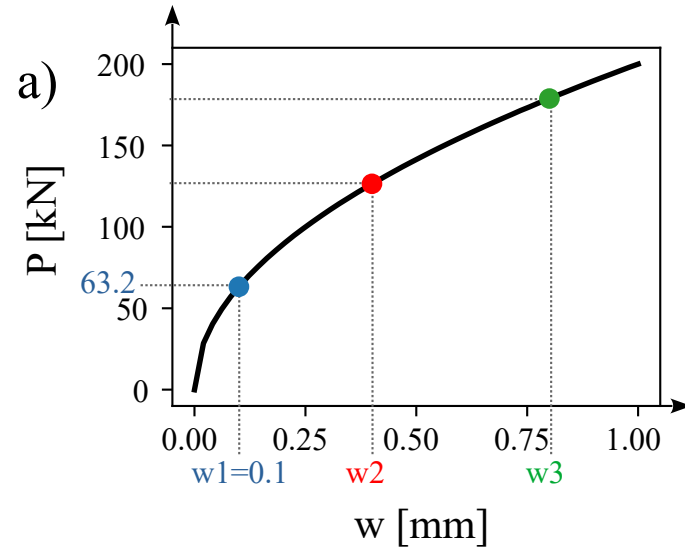
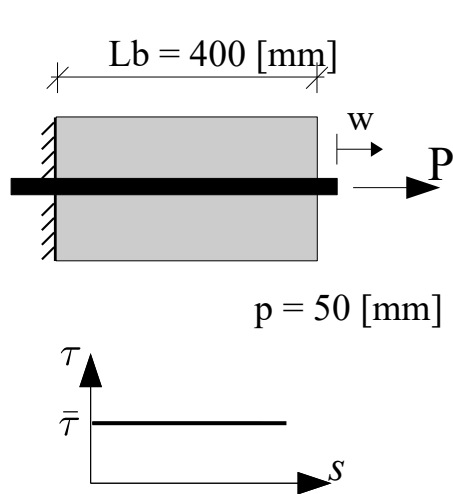
$$P(w) = p \times a(w) \times \bar{\tau}$$

at w_2 : $P(w_2) = 50 \times 253 \times 10 = 126.5$ kN

at w_3 : $P(w_3) = 50 \times 357.8 \times 10 = 178.9$ kN



X0201: Pull-out with constant bond-slip law



d) Calculate the displacements w_2 and w_3 .

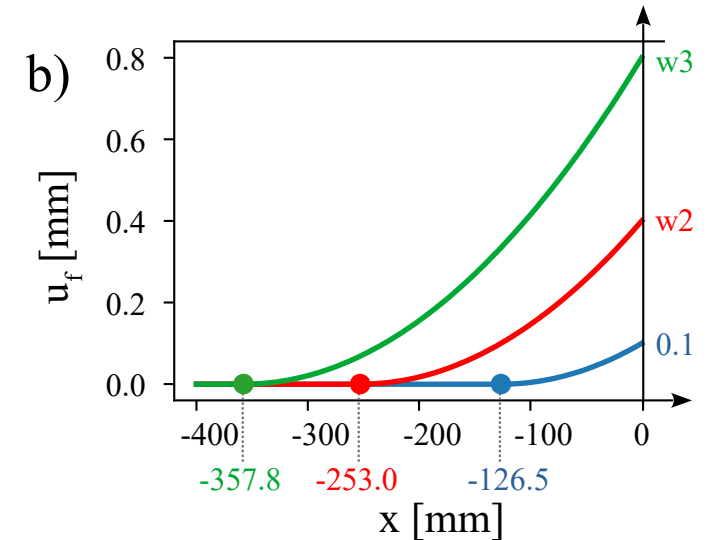
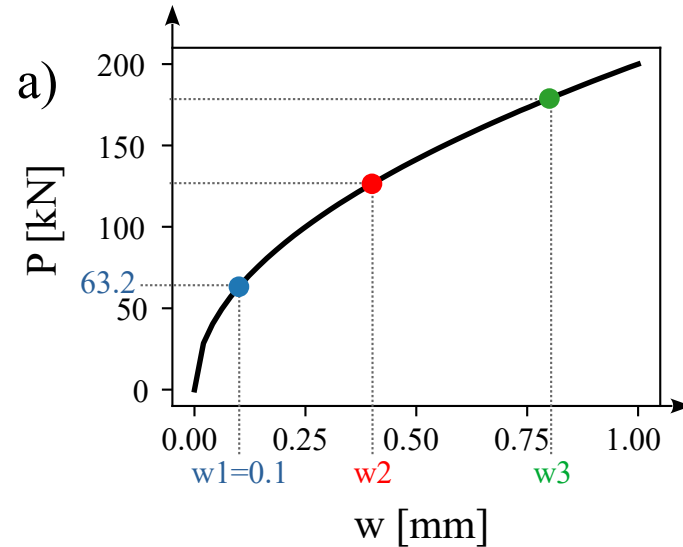
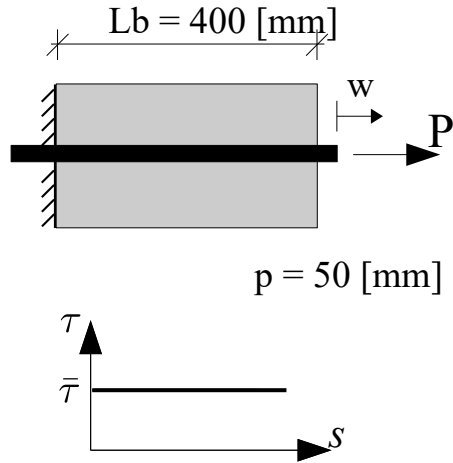
Solution:

$$P(w) = \sqrt{2 p \bar{\tau} E_f A_f w} \longrightarrow w = \frac{[P(w)]^2}{2 p \bar{\tau} E_f A_f}$$

$$w_2 = \frac{[126.5 \times 1000]^2}{2 \times 50 \times 10 \times 200000 \times 200} = 0.4 \text{ [mm]}$$

$$w_3 = \frac{[178.9 \times 1000]^2}{2 \times 50 \times 10 \times 200000 \times 200} = 0.8 \text{ [mm]}$$

X0201: Pull-out with constant bond-slip law



f) Plot strain profiles of the steel rebar at the loading stages w_1 , w_2 and w_3 .

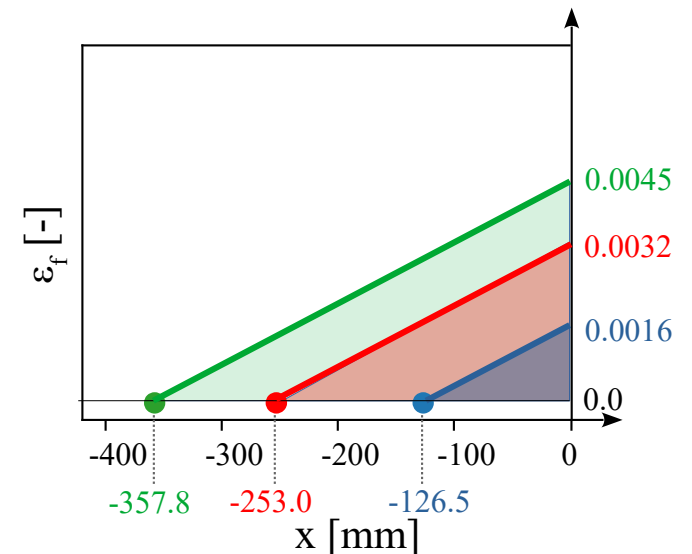
Solution: $u_{f,0} = \int_0^L \varepsilon_f dx$

$$w = \frac{1}{2} \times \varepsilon_f(x=0) \times a(w)$$

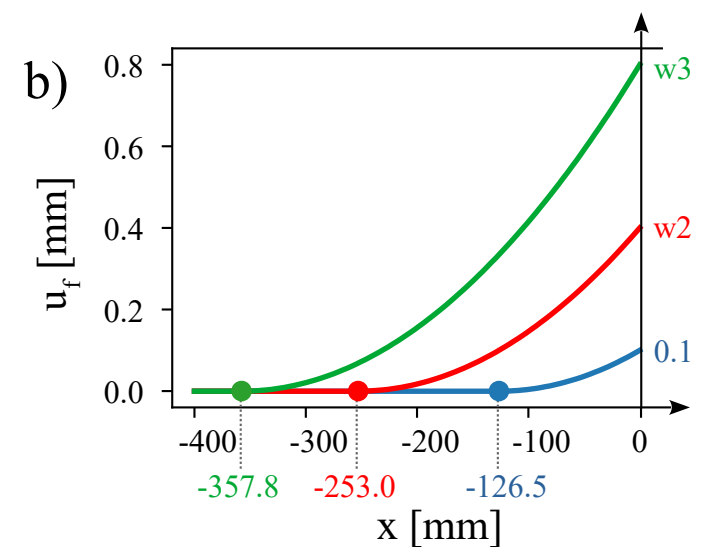
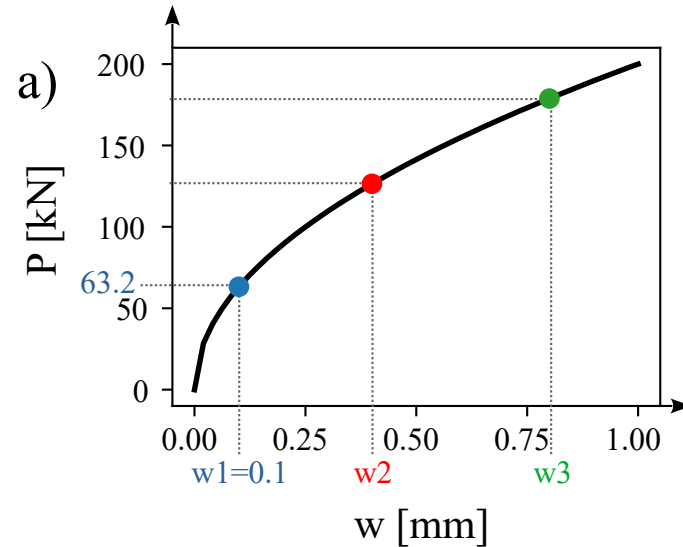
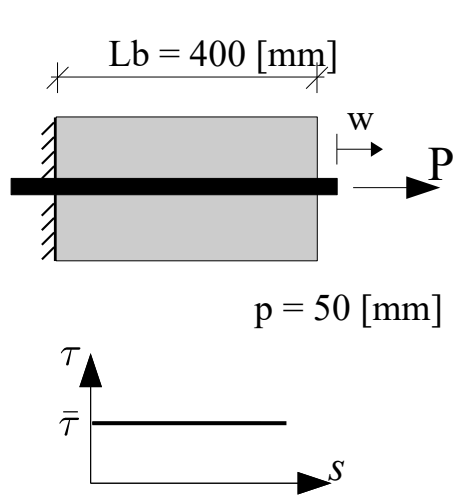
at w_1 : $\varepsilon_f(x=0) = 2 \times 0.1 / 126.5 = 0.0016$

at w_2 : $\varepsilon_f(x=0) = 2 \times 0.4 / 253.0 = 0.0032$

at w_3 : $\varepsilon_f(x=0) = 2 \times 0.8 / 357.8 = 0.0045$



X0201: Pull-out with constant bond-slip law



f) Plot the stress profiles of the steel rebar at the loading stages w_1 , w_2 and w_3 .

Solution:

$$\sigma_f = \varepsilon_f \times E_f$$

at w_1 : $\sigma_f(x=0) = 0.0016 \times 200000 = 320$ [MPa]

at w_2 : $\sigma_f(x=0) = 0.0032 \times 200000 = 640$ [MPa]

at w_3 : $\sigma_f(x=0) = 0.0045 \times 200000 = 900$ [MPa]

